

MA125-6C Chapter 3 Practice

Name: Key

Exercise 1. Determine the (a) domain, (b) intercepts, (c) symmetry, (d) asymptotes, (e) intervals of increase or decrease, (f) local maximum and minimum values, and (g) concavity and points of inflection of the following function. Provide a sketch of the function.

$$y = f(x) = \frac{x}{x^2 - 9}$$

a) Domain:  $(-\infty, -3) \cup (-3, 3) \cup (3, \infty)$

b) x-int  
 $y = \frac{(0)}{(0)^2 - 9} = 0$   
 $(0, 0)$

y-int  
 $0 = \frac{x}{x^2 - 9}$   
 $x = 0$   
 $(0, 0)$

c)  $f(-x) = \frac{-x}{(-x)^2 - 9} = \frac{-x}{x^2 - 9} = -f(x)$  odd  
 Symmetry about the origin.

d) Vertical  
 $\lim_{x \rightarrow -3^-} \frac{x}{x^2 - 9} = -\infty$

$\lim_{x \rightarrow -3^+} \frac{x}{x^2 - 9} = \infty$

$\lim_{x \rightarrow 3^-} \frac{x}{x^2 - 9} = -\infty$


$\lim_{x \rightarrow 3^+} \frac{x}{x^2 - 9} = \infty$

Horizontal

$\lim_{x \rightarrow \infty} \frac{x}{x^2 - 9} = \lim_{x \rightarrow \infty} \frac{\frac{1}{x}}{1 - \frac{9}{x^2}} = 0$

$\lim_{x \rightarrow -\infty} \frac{x}{x^2 - 9} = \lim_{x \rightarrow -\infty} \frac{\frac{1}{x}}{1 - \frac{9}{x^2}} = 0$

e)  $f'(x) = \frac{(x^2 - 9)(1) - x(2x)}{(x^2 - 9)^2}$   
 $= \frac{-x^2 - 9}{(x^2 - 9)^2} = \frac{-(x^2 + 9)}{(x^2 - 9)^2}$



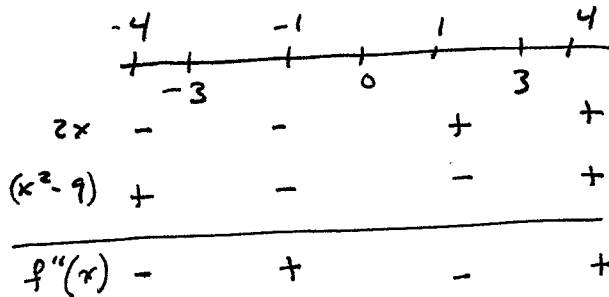
$f'(x) -$   
 Decreasing on  $(-\infty, -3) \cup (-3, 3) \cup (3, \infty)$

f) No local max/min since  $f'$  doesn't change signs.

g)  $f''(x) = \frac{(x^2 - 9)^2(-2x) + (x^2 + 9)2(x^2 - 9)(2x)}{(x^2 - 9)^4}$

$= \frac{2x(x^2 - 9)(-x^2 + 9 + 2x^2 + 18)}{(x^2 - 9)^4}$

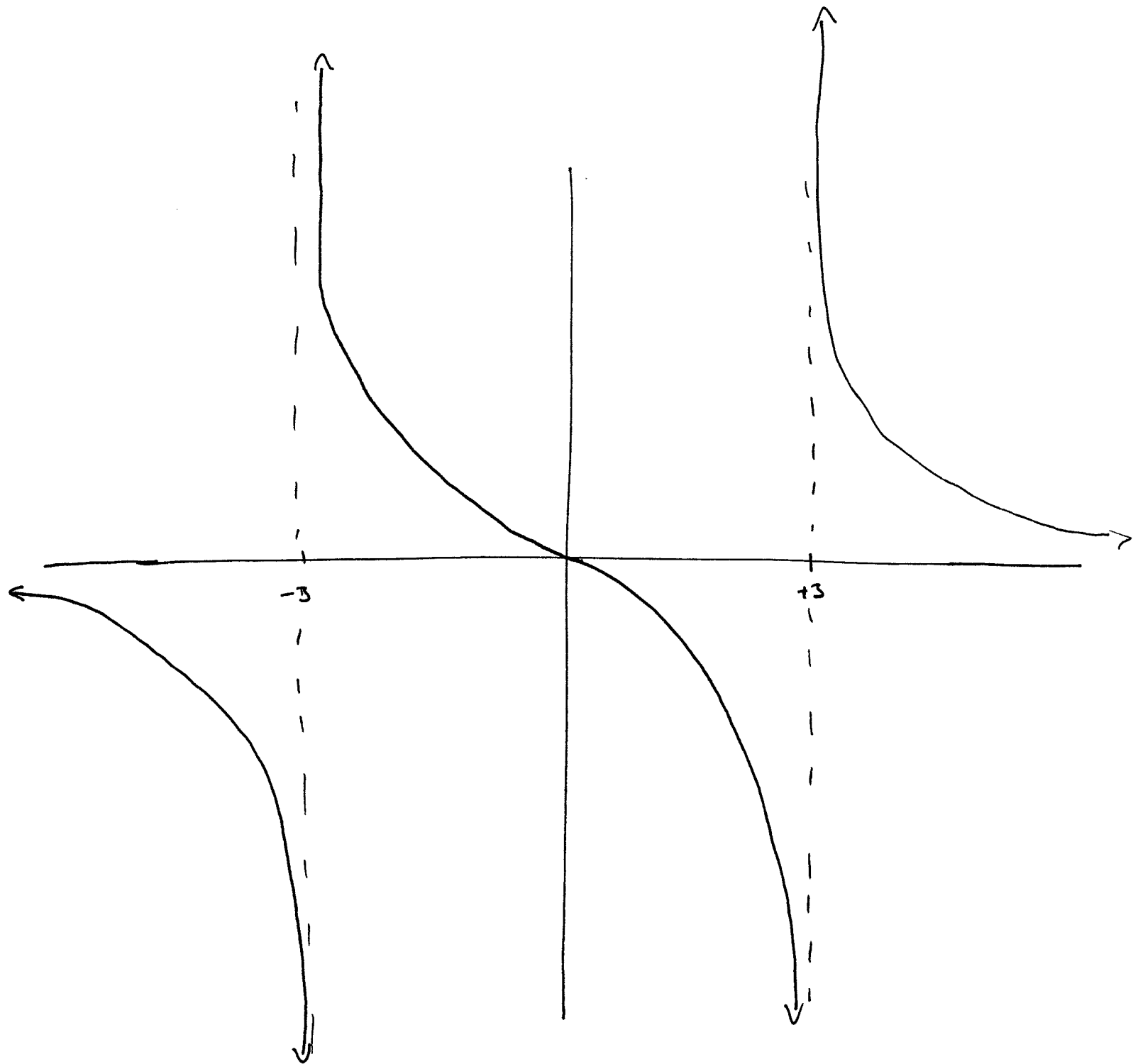
$= \frac{2x(x^2 - 9)(x^2 + 27)}{(x^2 - 9)^4}$



Concave up on  $(-3, 0) \cup (3, \infty)$

Concave down on  $(-\infty, -3) \cup (0, 3)$

Inflection pt at  $x=0$   
 No inflection pts  $\wedge$  due to domain



Exercise 2. Find two positive numbers whose product is 100 and whose sum is a minimum.

Let  $x$  &  $y$  be the numbers. Let  $S$  be their sum.

$$xy = 100 \Rightarrow y = \frac{100}{x}$$

$$S = x + y = x + \frac{100}{x}, \quad x > 0$$

$$S'(x) = 1 - \frac{100}{x^2}$$

$$= \frac{x^2 - 100}{x^2}$$

Critical ~~Pts~~ <sup>Pt</sup> at

$$x = 10$$

The values  $x = 0$  &  
 $x = -10$  are not in  
the domain.

Since  $S'(x) < 0$  for  $0 < x < 10$  &  
 $S'(x) > 0$  for  $x > 10$ ,  $S(10)$  is an  
absolute minimum. Thus, 10 & 10  
are the two numbers.

Exercise 3. Show that  $2x - 1 - \sin x = 0$  has exactly one real root.

Let  $f(x) = 2x - 1 - \sin(x)$ . Then  $f$  is continuous everywhere.

Then  $f(\pi) = 2\pi - 1 > 0$  &  $f(-\pi) = -2\pi - 1 < 0$ . The IVT  
states that there is at least one root in  $(-\pi, \pi)$ .

Suppose  $a$  &  $b$  are both roots of  $f$ . Then Rolle's Theorem  
says there is a  $c$  in  $(a, b)$  such that  $f'(c) = 0$ .

But  $f'(x) = 2 - \cos(x) \geq 1$ . Thus, there is exactly one  
real root.