

MA 125-8B, CALCULUS I

October 16, 2014

Name (Print last name first): Key.....

Show all your work and justify your answer!

No partial credit will be given for the answer only!

PART I

You must simplify your answer when possible.

All problems in Part I are 10 points each.

1. Find the absolute maximum and minimum of the function

$y = f(x) = (x^2 - 1)^3$ on the interval $[-1, 2]$.

Critical Points

$$f'(x) = 3(x^2 - 1)^2(2x)$$

$$= 6x((x-1)(x+1))^2$$

$f'(x) = 0$ when

$x = 0, x = 1, x = -1$

Closed Interval Method

$f(0) = -1$

$f(1) = 0$

$f(-1) = 0$

$f(2) = 27$

Absolute max is 27 at $x = 2$

Absolute min is -1 at $x = 0$

2. Find the number c which satisfies the conclusion of the Mean Value Theorem for

the function $y = f(x) = x^2 + x$ on the interval $[0, 4]$.

We want c in $(0, 4)$ where $f'(c) = \frac{f(4) - f(0)}{4 - 0} = \frac{20 - 0}{4 - 0} = 5$

$f'(x) = 2x + 1$ so $f'(c) = 2c + 1 = 5$ gives

$2c = 4$

$c = 2$.

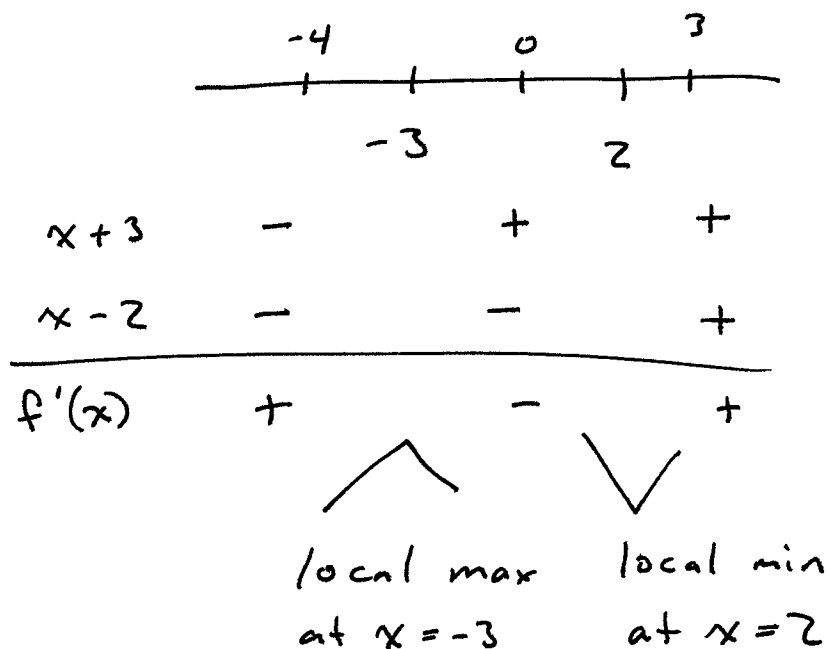
3. Find all critical numbers of the function $y = f(x) = 2x^3 + 3x^2 - 36x + 12$ and identify all local max/min if any.

$$f'(x) = 6x^2 + 6x - 36$$

$$= 6(x^2 + x - 6)$$

$$= 6(x+3)(x-2)$$

Critical points are $x=2$ & $x=-3$.



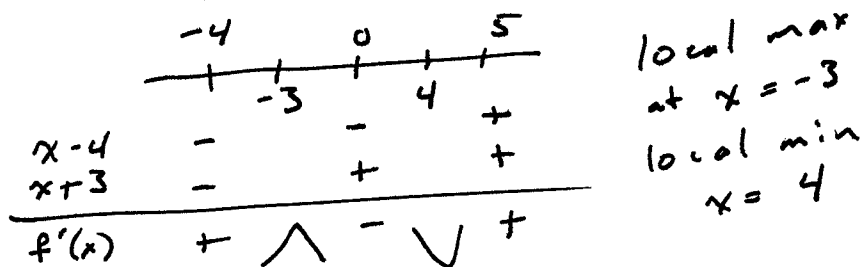
4. Suppose that the derivative of a function $y = f(x)$ is:
 $f'(x) = x^2 - x - 12$.

(a) Find the x -coordinates of all local max/min of the function $y = f(x)$.

$$f'(x) = x^2 - x - 12 = 0$$

$$(x-4)(x+3) = 0$$

critical points $x=4$
 $x=-3$

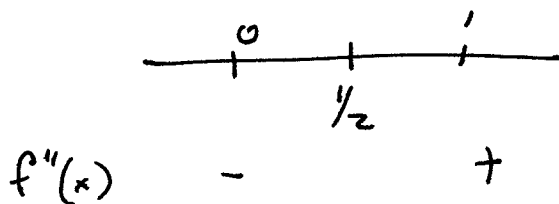


(b) At which x is the function $y = f(x)$ most rapidly decreasing?

$$f''(x) = 2x - 1$$

$$f''(x) = 0 \text{ when}$$

$$x = \frac{1}{2}$$



$x = \frac{1}{2}$ is an absolute min of $f'(x)$, thus f decreases fastest at $x = \frac{1}{2}$.

PART II

5. [15 points] The concentration of an average student during a 3 hour test at time t is given by $C(t) = 2t^3 - 3t^2 - 12t + 20$. When, during the test, is the student's concentration maximal?

Closed interval method since $0 \leq t \leq 3$.

$$C'(t) = 6t^2 - 6t - 12 = 6(t^2 - t - 2) = 6(t-2)(t+1)$$

critical points at $t=2$ & $t=-1$, but only $t=2$ is in our interval.

$$C(0) = 20$$

$$C(3) = 2(3)^3 - 3(3)^2 - 12(3) + 20$$

$$= 2(27) - 3(9) - 36 + 20$$

$$= 54 - 27 - 36 + 20$$

$$= 11$$

$$C(2) = 2(2)^3 - 3(2)^2 - 12(2) + 20$$

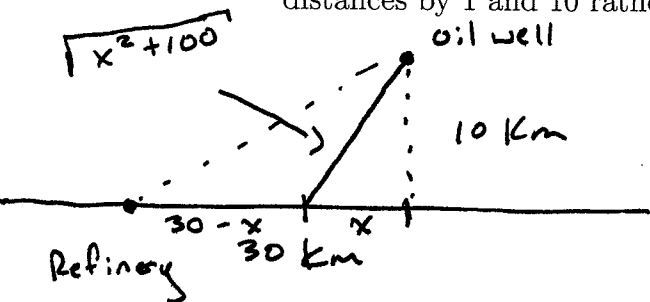
$$= 2(8) - 3(4) - 24 + 20$$

$$= 16 - 12 - 24 + 20$$

$$= 0$$

∴ Absolute max is 20 at $t=0$.

6. [15 points] An oil refinery is located on the shore and an oil well is located 10 km off shore 30 km east of the refinery. [Hence if the refinery is located at (0,0) and the x -axis is the shore line, then the well is located at (30,10).] If it costs 10 million per kilometer to lay a pipe line in the ocean and 1 million per kilometer to lay a pipe line on land, how should one lay the pipe line from the well to the refinery to minimize the cost? Tip: To avoid working with very large numbers, you should use cost coefficients in millions per kilometer. That is, multiply your distances by 1 and 10 rather than 1,000,000 and 10,000,000.



Let x be the distance the pipe is not run along the shore. Then $0 \leq x \leq 30$. Let $C(x)$ be the cost.

Then $C(x) = 1(30-x) + 10\sqrt{x^2+100}$.

$$C'(x) = -1 + 10 \left(\frac{1}{2} (x^2+100)^{-1/2} (2x) \right)$$

$$= -1 + \frac{10x}{\sqrt{x^2+100}} = 0$$

$$\frac{10x}{\sqrt{x^2+100}} = 1$$

$$10x = \sqrt{x^2+100}$$

$$100x^2 = x^2 + 100$$

$$99x^2 = 100$$

$$x^2 = \frac{100}{99}$$

$$x = \frac{10}{\sqrt{99}}$$

Closed interval method!

$$C(0) = 30 + 10\sqrt{100} = 130$$

$$C(30) = 10\sqrt{900+100} = 10\sqrt{1000} = 100\sqrt{10} \approx 316$$

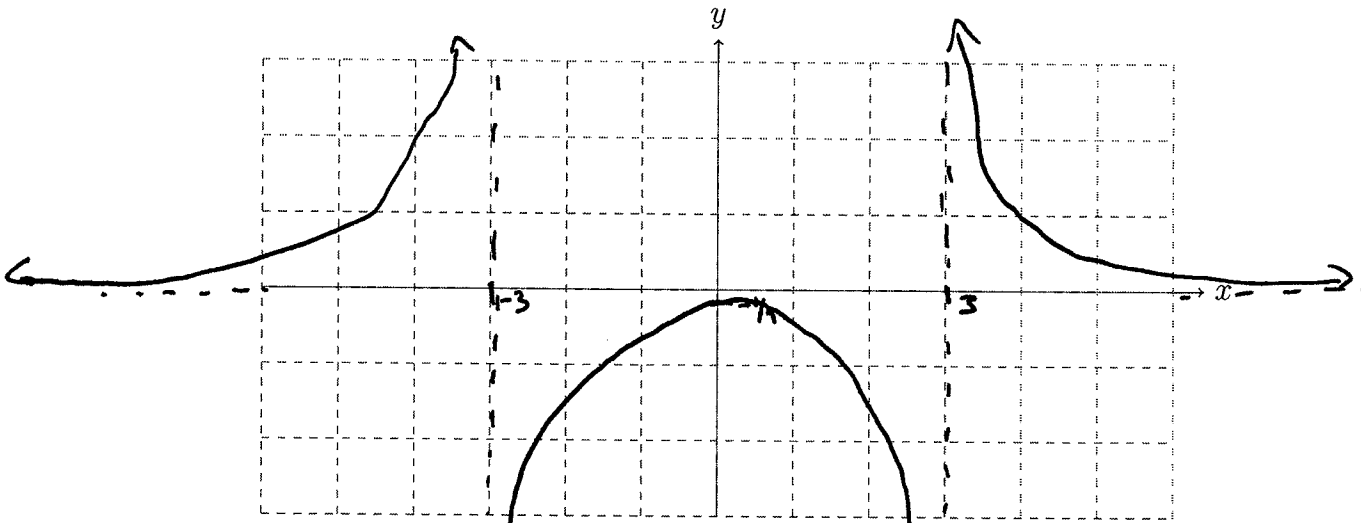
$$C\left(\frac{10}{\sqrt{99}}\right) = 30 - \frac{10}{\sqrt{99}} + 10\sqrt{\frac{100}{99} + 100} \approx 129.5$$

So the cost is minimized when $x = \frac{10}{\sqrt{99}} \approx 1.005$ km

7. [20 points] Use calculus to graph the function $y = f(x) = \frac{1}{x^2 - 9}$. Indicate

- x and y intercepts,
- vertical and horizontal asymptotes (if any),
- in/de-creasing; local max/min (if any).

You must show work to justify your graph and conclusions. You can use decimal numbers to plot points (but mark them with exact values).



X-int
 $0 = \frac{1}{x^2 - 9}$

y-int
 $y = \frac{1}{0^2 - 9} = -\frac{1}{9}$

$$f'(x) = \frac{(x^2 - 9)(0) - (2x)(1)}{(x^2 - 9)^2}$$

$$= \frac{-2x}{(x^2 - 9)^2}$$

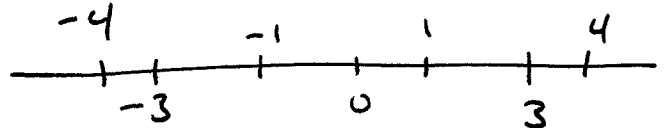
no x-int

Horizontal Asymptotes

$$\lim_{x \rightarrow \infty} \frac{1}{x^2 - 9} = 0$$

$$\lim_{x \rightarrow -\infty} \frac{1}{x^2 - 9} = 0$$

critical pts $x = 0, x = 3, x = -3$



$-2x$	+	+	-	-
$f'(x)$	+	+	-	-

Vertical Asymptotes

$$\lim_{x \rightarrow -3^-} \frac{1}{x^2 - 9} = \infty \quad \lim_{x \rightarrow 3^-} \frac{1}{x^2 - 9} = -\infty$$

$$\lim_{x \rightarrow -3^+} \frac{1}{x^2 - 9} = -\infty \quad \lim_{x \rightarrow 3^+} \frac{1}{x^2 - 9} = \infty$$

Increasing on $(-\infty, -\frac{3}{2}) \cup (-\frac{3}{2}, 0)$ local max @ $x = 0$
 Decreasing on $(0, 3) \cup (3, \infty)$

8. This question has two parts.

(a) [6 points] Show that the equation $y = f(x) = 2x^3 + 3x - \sin(x) + \frac{1}{100} = 0$ has exactly one solution.

$$f(0) = \frac{1}{100} > 0$$

$$\begin{aligned} f(-1) &= -2 - 3 - \sin(-1) + \frac{1}{100} \\ &= \left(-5 + \frac{1}{100}\right) + \sin(1) < 0 \end{aligned}$$

So, IUT says there is at least one root in $(-1, 0)$.

Suppose there are two roots at $x=a$ & $x=b$. Then Rolle's Theorem says there is a c in (a, b) where $f'(c) = 0$.

$$f'(x) = 6x^2 + 3 - \cos(x)$$

To find c we solve

$$6x^2 + 3 - \cos(x) = 0$$

$$\Rightarrow \cos(x) = 6x^2 + 3 \geq 3$$

so no solution. Thus,

f has only one root.

(b) [4 points] Find the linearization of $f(x)$ at $a = 0$ and use this linearization to approximate the solution of $f(x) = 0$.

$$L(x) = f(a) + f'(a)(x-a)$$

$$f(0) = \frac{1}{100} \quad f'(0) = 3 - 1 = 2$$

$$L(x) = \frac{1}{100} + 2x$$

To approximate $f(x) = 0$

we solve $L(x) = 0$.

$$L(x) = \frac{1}{100} + 2x = 0$$

$$2x = -\frac{1}{100}$$

$$\boxed{x = -\frac{1}{200}}$$